



Pakistan's largest
MATHS OLYMPIAD



PAKTURK
INTERNATIONAL SCHOOLS & COLLEGES

EXAM BOOKLET FOR CLASS 7

13th NATIONAL INTER-SCHOOL MATHS OLYMPIAD

www.ismo.pk

 /ismoolympiad

 /ismopakturk

Official Partner



Pakistan Science Foundation



Ministry of Capital
Administration
and Development



Islamabad, Lahore, Karachi, Peshawar, Quetta, Multan, Khairpur, Hyderabad, Jamshoro

13th NATIONAL INTER-SCHOOL MATHS OLYMPIAD

INSTRUCTIONS

1. The total time for the Olympiad is 90 minutes. There is no negative marking.
2. There are 50 questions. (Calculator is not allowed.)
3. Do not forget to write your name, class and gender on your answer sheet.
4. There is only one correct answer for each question out of given 4 options A, B, C, D. If you mark more than one choice the answer will be considered wrong. Mark your answers on answer sheet; marks on the booklet will not be accepted.
5. Answer sheets will be checked by using the optical reader. Do not fold or use your answer sheet for calculation etc.
6. Before you begin to answer the questions, read them carefully.
7. You may begin your answer from any question; however you must make sure that the number of the question you are answering matches the correct number in the answer sheet.
8. Mark your answer with a lead pencil by filling only the inside of the circles. Do not write or put any other mark on your answer sheet.
9. Speed is important when you answer the questions. If you have difficulty with a question, do not waste your time to solve it, just move on to the next question, You may go back to the 'difficult' question if you still have time after finishing other parts of the Olympiad.
10. The blank areas in the booklet may be used for writing and calculations.
11. Answer key will be uploaded on our website at 7:00 p.m. on 27th November 2017.
12. Results will be announced through our website (www.ismo.pk).

Q1: How many integers are there between -12 and 157

- A) 26 B) 27 C) 28 D) 29

Q2: Which of the following is the product of additive and multiplicative inverse of $-\frac{7}{8}$?

- A) $\frac{49}{64}$ B) $-\frac{49}{64}$ C) 1 D) -1

Q3: The sum of the two-digit numbers ab and ba is 187.

$$\begin{array}{r} ab \\ + ba \\ \hline 187 \end{array}$$

What is the value of $a + b$?

- A) 16 B) 11 C) 17 D) 18

Q4: $[a + (b - c)] - [2a - (c + 2b)]$

- A) $a + b + c$ B) $a - 2c$
C) $3b - a$ D) $3a - b$

Q5: What is the maximum value of $3a - b - 2c$ for the different values of a , b and c which are the elements of the set $\{1, 2, 3, 4, 5\}$?

- A) 11 B) 10 C) 9 D) 8

Q6: Which of the following is a cube of a natural number and as well as a square of a natural number?

- A) 8 B) 64 C) 256 D) 1000

Q7: $\sqrt{1 + \sqrt{1 + \frac{9}{16}}} = ?$

- A) $\frac{2}{3}$ B) $\frac{3}{2}$ C) $\frac{3}{4}$ D) $\frac{1}{2}$

Q8: The product of $\sqrt{3}$ and which of the following is a natural number?

- A) $\sqrt{48}$ B) $\sqrt{64}$ C) $\sqrt{72}$ D) $\sqrt{54}$

Q9: Evaluate $b^2 + c^2 - a^2$ if $a = 0.5$, $b = 0.3$ and $c = 0.4$

- A) 0.2 B) -0.2 C) 1 D) 0

Q10: Which of the following expression has negative value?

- A) $4^2 - 3 \times 5$ B) $2^2 + (-2)^4$
 C) $16 + 4 \times (-5)$ D) $100 + 25 - 4$

Q11: Sum of three consecutive odd numbers is 189. What is the middle one?

- A) 61 B) 63 C) 65 D) 53

Q12: If 432 can be written as $2^m \times 3^n$, then what is $m \times n$?

- A) 6 B) 12 C) 7 D) 14

Q13: What is the remainder when the sum of 7654321 and 1234567 is divided by the sum of the digits of 1234?

- A) 8 B) 9 C) 6 D) 1

Q14: $\left(2 - \frac{1}{3}\right)^0 + 1 = ?$

- A) 0 B) 1 C) 2 D) $\frac{8}{3}$

Q15: What is the value of $3+6+9+12+ \dots + 111 + 114$ if $1+2+3+4+ \dots + 37+38$ is 741?

- A) 2222 B) 2223 C) 2845 D) 3223

Q16: $7+7+7-7 \times 7 = ?$

- A) -47 B) -41 C) 42 D) -35

Q17: Which of the following is incorrect?

- A) $(+) \times (+) = (+)$ B) $(+) \times (-) = (-)$
 C) $(-) \times (+) = (-)$ D) $(-) \times (-) = (-)$

Q18: What is the simplest form of $1 - \frac{1}{1 + \frac{1}{1 + \frac{1}{2}}}$?

- A) $\frac{1}{5}$ B) $\frac{2}{3}$ C) $\frac{2}{5}$ D) $\frac{5}{2}$

Q19: $\frac{a}{b} = \frac{c}{d}$ is a proportion where a, b, c, d are natural numbers. Which one of the following is always a natural number?

- A) $\frac{a}{b}$ B) $\frac{c}{d}$ C) $\frac{a+b}{c+d}$ D) $\frac{ad}{bc}$

Q20: Which of the following order is correct?

- A) $2\sqrt{8} < 4\sqrt{3} < 3\sqrt{5} < \sqrt{44}$
 B) $4\sqrt{3} < 2\sqrt{8} < \sqrt{44} < 3\sqrt{5}$
 C) $2\sqrt{8} < \sqrt{44} < 3\sqrt{5} < 4\sqrt{3}$
 D) $3\sqrt{5} < 2\sqrt{8} < \sqrt{44} < 4\sqrt{3}$

Q21: What is the value of $\frac{a+b}{a}$ if $\frac{a}{b} = \frac{1}{7}$?

- A) 8 B) 10 C) 12 D) 14

Q22: $(-2) \times (-37) \times (-10) = ?$

- A) -740 B) -370 C) 2310 D) 49

Q23: What is the unknown number indicated by question mark in the figure given below?

16	(43)	9
25	(58)	64
81	(?)	49

- A) 67 B) 87 C) 97 D) 19

Q24: A football is made by 15 regular hexagons and 20 regular pentagons. Each areas of the hexagon and the pentagon are 20 cm^2 and 30 cm^2 respectively. What is the surface area of the football?

- A) 1440 cm^2 B) 1750 cm^2
 C) 900 cm^2 D) 840 cm^2

Q25: Every day Mary writes down the date and calculates the sum of the digits written. For example, on April 12 she writes 12.04 and calculates $1 + 2 + 0 + 4 = 7$. What is the largest sum that she calculates during a year?

- A) 20 B) 19 C) 18 D) 17

Q26: The product of which of the following two numbers is not 72?

- A) -8 and -9 B) -72 and -1
 C) -8 and 9 D) 1 and 72

Q27: The sum of two fractions is $1\frac{1}{2}$ and their difference is $\frac{5}{12}$. What is the product of the fractions?

- A) $\frac{799}{576}$ B) $\frac{759}{576}$ C) $\frac{797}{576}$ D) $\frac{791}{576}$

Q28: In which of the following, rational numbers are in ascending order?

- A) $2\frac{1}{4}, -1\frac{5}{6}, 2\frac{1}{3}, -\frac{7}{6}$ B) $2\frac{1}{3}, 2\frac{1}{4}, -\frac{7}{6}, -1\frac{5}{6}$
 C) $-1\frac{5}{6}, -\frac{7}{6}, 2\frac{1}{4}, 2\frac{1}{3}$ D) $2\frac{1}{4}, 2\frac{1}{3}, -1\frac{5}{6}, -\frac{7}{6}$

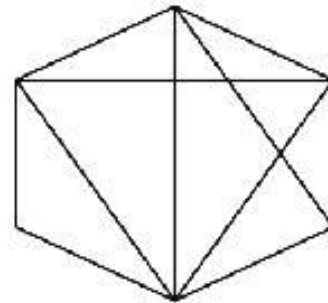
Q29: If $m = 1 + \frac{1}{3} + \frac{1}{6} + \frac{1}{9}$ and $n = 1 + \frac{1}{2} + \frac{1}{4} + \frac{1}{8}$ then what is the value of $\frac{m+n}{m-n}$?

- A) $\frac{19}{251}$ B) $-\frac{19}{251}$ C) $\frac{251}{19}$ D) $-\frac{251}{19}$

Q30: If $180 = a \times b \times c \times d \times e$ where a, b, c, d and e are different positive integers, then what is $a+b+c+d+e$?

- A) 12 B) 17 C) 18 D) 21

Q31: How many triangles are there in the given figure below?



- A) 8 B) 17 C) 18 D) 19

Q32: A, B, C and D are four consecutive negative integers ordered from greatest to smallest. Which of the following is the greatest one?

- A) $A - B$ B) $C - A$
 C) $D - B$ D) $D - A$

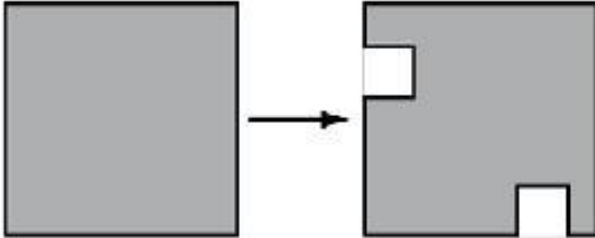
Q33: Which of the following is both a square number and a cube number?

- A) 12^5 B) 3^{12} C) 4^9 D) 5^6

Q34: Arma is 3 times as old as her younger sister. The sum of their ages is 16 years. How old is her younger sister?

- A) 4 B) 8 C) 10 D) 12

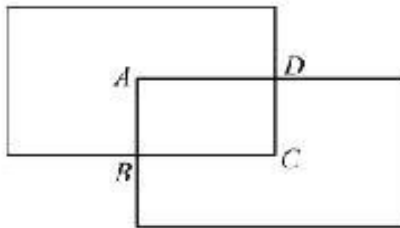
Q35: Two congruent squares are removed from a square as it is shown below.



What is the perimeter of the second figure if the area of first figure is 576 m^2 and the area of each square that is removed is 25 m^2 ?


- A) 126 m B) 108 m C) 86 m D) 76 m

Q36: In the figure below, the overlapped rectangles are congruent. The points B and D are the midpoints. What is the perimeter of the whole figure if the perimeter of ABCD is 72 cm?



- A) 196 cm B) 200 cm
C) 216 cm D) 224 cm

Q37: Any two adjacent points are equidistant vertically and horizontally. How many squares can be obtained by joining any four points?



- A) 4 B) 5 C) 6 D) 7

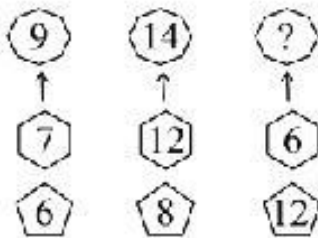
Q38: Ammar added the lengths of three sides of a rectangle and got 80 cm. Sohail added the lengths of three sides of the same rectangle and got 100cm. What is the perimeter of the rectangle?

- A) 100 cm B) 110 cm
C) 120 cm D) 130 cm

Q39: Raees is three times as old as Ahsan, who is two years older than half of Farhan's age. If Farhan is 12, how old is Raees?

- A) 8 B) 18 C) 20 D) 24

Q40: What is the unknown number indicated by question mark in the figure given below?



- A) 72 B) 18 C) 12 D) 10

Q41: 24 percent of a number is equal to 10 more than 16 percent of twice of the same number. What is the number?

- A) -125 B) -250 C) 125 D) 250

Q42: A book seller sold a book for Rs. 250. What percent should he increase the price in order to sell it for Rs. 320?

- A) 20% B) 28% C) 30% D) 32%

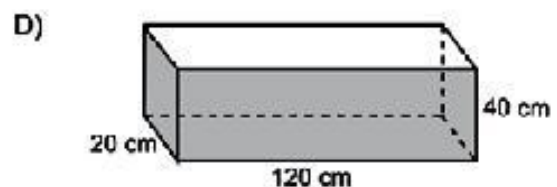
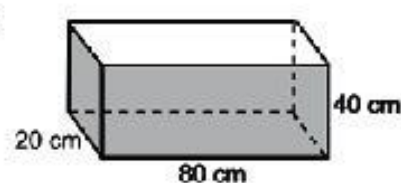
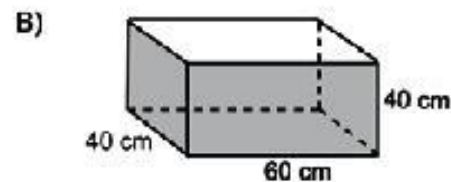
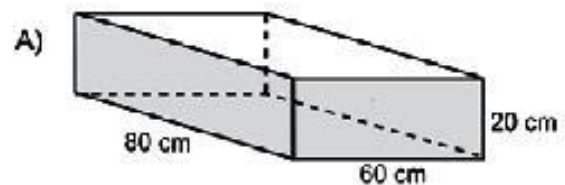
Q43: a and b are inversely proportional to 3 and 5 respectively. Which of the following is not correct?

- A) $\frac{a}{b} = \frac{5}{3}$ B) $\frac{3}{a} = \frac{5}{b}$
 C) $3a = 5b$ D) $\frac{a}{5} = \frac{b}{3}$

Q44: If n is an odd integer, which of the following must be an even integer?

- A) $3n - 2$ B) $3(n + 1)$
 C) $n - 2$ D) $\frac{n}{3}$

Q45: Which of the following cube has different volume?



Q46: Fundraising is organized for internally displayed people (IDPs). The money collected every hour is doubled. If Rs.1 million is collected in the first hour, then the total amount collected at the end of six hours will be:

- A) Rs. 16 millions B) Rs. 32 millions
C) Rs. 64 millions D) Rs. 72 millions

Q47: If $1.2 - \frac{x}{1.2} + 4.5x - \frac{x}{4.5} = 5.6 + x$, then what is the value of $x + \frac{1}{x}$?

- A) $\frac{53}{9}$ B) $\frac{103}{48}$ C) $\frac{104}{15}$ D) $\frac{106}{45}$

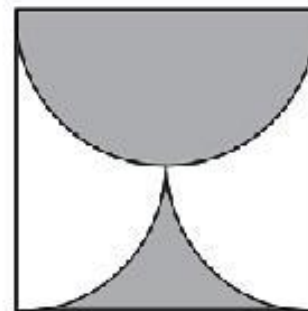
Q48: Junaid accepted a reduction of 20% in his salary when his company was not doing well. Now his company's financial position has improved and his boss wants to restore his original salary. By what percentage must his reduced salary be increased?

- A) 10% B) 8% C) 12% D) 25%

Q49: If p is 30% of q and q is 20% of r and r is 40% of s then what is the ratio of s to p ?

- A) 125:3 B) 30:125
C) 125:30 D) 3:125

Q50: The shaded part of the square with side a is bounded by a semicircle and two quarter arcs. What is the area of shaded regions in terms of a ?



- A) $\pi \frac{a^2}{2}$ B) $\frac{a^2}{2}$ C) $\pi \frac{a^2}{4}$ D) $\frac{a^2}{4}$

Bright Future is waiting for PakTurk students



Marla Batool Zaidi

1st POSITION
In HSSC - II, 2016
Sukkur Board



Sumbul Jabbar

1st POSITION
In Pre-Engineering (Girls)
In HSSC - II, 2017
Sukkur Board



Zehra Batool

1st POSITION
In HSSC - II, 2017
Pre-Medical (Overall)
Sukkur Board



Usman Khalid

2nd POSITION
In HSSC - II, 2016
Lahore Board



M. Nouman Tariq

3rd POSITION
In HSSC - II, 2017
Federal Board



Sadaf Muir

3rd POSITION
In SSC - II, 2017
Baluchistan Board



Tousoof-Ur-Rehman

3rd POSITION
In HSSC - II, 2016
Lahore Board



Saania Nazir

Top In World
In IGCSE Level Accounting
Top In Pakistan
In IGCSE Level Economics



Arnooqan Aslam

TOP
In North Pakistan
In Cambridge
International AS Level
Maths Language



Areeba Haider

TOP
In Punjab
In English as a
Second Language
In Cambridge IGCSE



Soban Mahmood

**2nd Place in Best Across Five
Cambridge International
AS Levels**

PAKISTAN'S FIRST "OXFORD QUALITY SCHOOLS"



PESHAWAR



LAHORE



ISLAMABAD



HYDERABAD



JAMSHORO



KARACHI



ISLAMABAD



LAHORE



QUETTA