



Pakistan's largest
MATHS OLYMPIAD



PAKTURK
INTERNATIONAL SCHOOLS & COLLEGES

EXAM BOOKLET FOR CLASS 6

13th NATIONAL INTER-SCHOOL MATHS OLYMPIAD

www.ismo.pk

 /ismoolympiad

 /ismopakturk

Official Partner



Pakistan Science Foundation



Ministry of Capital
Administration
and Development



Islamabad, Lahore, Karachi, Peshawar, Quetta, Multan, Khairpur, Hyderabad, Jamshoro

13th NATIONAL INTER-SCHOOL MATHS OLYMPIAD

INSTRUCTIONS

1. The total time for the Olympiad is 90 minutes. There is no negative marking.
2. There are 50 questions. (Calculator is not allowed.)
3. Do not forget to write your name, class and gender on your answer sheet.
4. There is only one correct answer for each question out of given 4 options A, B, C, D. If you mark more than one choice the answer will be considered wrong. Mark your answers on answer sheet; marks on the booklet will not be accepted.
5. Answer sheets will be checked by using the optical reader. Do not fold or use your answer sheet for calculation etc.
6. Before you begin to answer the questions, read them carefully.
7. You may begin your answer from any question; however you must make sure that the number of the question you are answering matches the correct number in the answer sheet.
8. Mark your answer with a lead pencil by filling only the inside of the circles. Do not write or put any other mark on your answer sheet.
9. Speed is important when you answer the questions. If you have difficulty with a question, do not waste your time to solve it, just move on to the next question, You may go back to the 'difficult' question if you still have time after finishing other parts of the Olympiad.
10. The blank areas in the booklet may be used for writing and calculations.
11. Answer key will be uploaded on our website at 7:00 p.m. on 27th November 2017.
12. Results will be announced through our website (www.ismo.pk).

Q1: What is the unknown number indicated by question mark?



- A) 100 B) 88 C) 52 D) 68

Q2: How many even numbers are there between 112 and 189?

- A) 38 B) 39 C) 40 D) 41

Q3: Which of the following is not equivalent to 10 percent?

- A) $\frac{1}{5}$ B) 0.1 C) $\frac{10}{100}$ D) $\frac{1}{10}$

Q4: L.C.M of any two prime numbers is:

- A) sum of the numbers
 B) product of the numbers
 C) difference of the numbers
 D) greater prime number

Q5: $4.8+12.2+0.2+4.2= ?$

- A) 28.4 B) 22.4 C) 21.4 D) 29.2

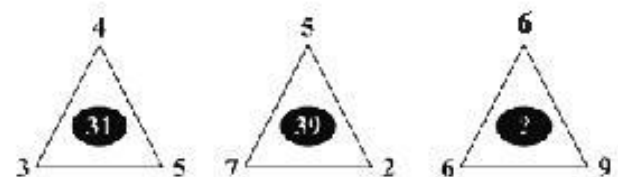
Q6: $\frac{1-\frac{1}{2}}{\frac{1}{4}-0.25}=?$

- A) 1 B) $\frac{1}{2}$ C) $\frac{1}{3}$ D) $\frac{1}{4}$

Q7: $\frac{1}{9}+\frac{1}{16}\times\frac{64}{3}=?$

- A) $\frac{13}{6}$ B) $1\frac{4}{9}$ C) $\frac{11}{9}$ D) $4\frac{1}{3}$

Q8: What is the unknown number indicated by question mark?



- A) 60 B) 65 C) 75 D) 80

Q9: If two fractions are equivalent, then which of the following is always correct?

- A) The numerators are equal
 B) Cross products are equal
 C) The denominators are equal
 D) Their sum is 1

Q10: $0.02 - 0.002 = ?$

- A) 1.8 B) 1.08 C) 0.018 D) 0.18

Q11: $24 + 3^2 + 9 - 5 + 3 \times 10 = ?$

- A) 44 B) 50 C) 58 D) 64

Q12: A natural number which is divisible by one and itself is called a:

- A) Composite Number B) Prime Number
C) Factor D) Prime Factorization

Q13: What is the sum of the three greatest positive factors of 100?

- A) 175 B) 160 C) 150 D) 85

Q14: Which of the following is not a prime factor of 600?

- A) 5 B) 7 C) 3 D) 2

Q15: Which of the following is not wrong?

- A) $48 = 2^4 \times 3$ B) $72 = 2^3 \times 3^3$
C) $168 = 2^2 \times 3^2 \times 7$ D) $144 = 2^4 \times 3^3$

Q16: Which of the following number should be removed to make L.C.M. of the remaining numbers 144?

48, 24, 72, 16, 60

- A) 48 B) 72 C) 24 D) 60

Q17: The smallest positive number that can be multiplied by 0.02 to get a natural number is:

- A) 25 B) 40 C) 50 D) 75

Q18: $\frac{7}{70} + \frac{3}{30} + \frac{2}{20} + \frac{4}{40} = ?$

- A) 0.5 B) 0.05 C) 0.4 D) 0.04

Q19: Which of the following operation has the greatest value?

- A) $10 + 2 + 3 \times 5$ B) $5 \times 2 + 3 \times 5$
C) $10 \times 2 + 20 + 2$ D) $2 \times 10 + 5 - 2 + 6$

Q20: A pen costs 3 times as much as a pencil and half as much as a fancy marker. Determine the cost of the marker if the cost of the pencil is Rs. 500.

- A) Rs. 750 B) Rs. 1500
C) Rs. 3000 D) Rs. 4500

Q21: Which decimal number below is same as $\frac{14}{28}$?

- A) 0.45 B) 0.5 C) 0.75 D) 0.80

Q22: There are 154 students in a school, how many students are absent if $\frac{11}{14}$ of them are present?

- A) 28 B) 29 C) 31 D) 33

Q23: The average speed of a car is 75 km/h. How many meters can the car travel in 20 minutes?

- A) 25 B) 250
C) 2500 D) 25000

Q24: What is the value of n if

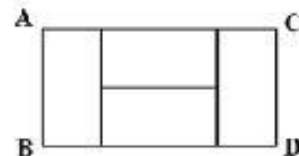
$$\left(1 - \frac{1}{2}\right) \times \left(1 - \frac{1}{3}\right) \times \left(1 - \frac{1}{4}\right) \dots \dots \left(1 - \frac{1}{n}\right) = \frac{1}{25}$$

- A) $\frac{1}{5}$ B) $\frac{1}{25}$ C) 5 D) 25

Q25: In a class of 36 students, 18 of the students are boys. How many more boys should join the class so that the ratio of the boys will be 2/3?

- A) 12 B) 18 C) 24 D) 36

Q26: Rectangle ABCD consists of 4 congruent rectangles. If the perimeter of one of congruent rectangles is 24 cm, then what is the perimeter of rectangle ABCD?



- A) 24 cm B) 48 cm C) 72 cm D) 96 cm

Q27: How many minutes are there in a week?

- A) 1440 B) 10080
C) 86400 D) 172800

Q28: Which of the following number is divisible by H.C.F. of 51 and 85?

- A) 425 B) 485 C) 515 D) 517

Q29: When a certain positive integer is divided by 7 gives a remainder of 5 and when it is divided by 11 gives a remainder of 8. Hence the integer can be:

- A) 12 B) 30 C) 15 D) 19

Q30: The average of four numbers is 75. If three of them are 45, 80 and 55, what is the fourth number?

- A) 130 B) 120 C) 110 D) 80

Q31: If $48 = 8 \times a = 4 \times b = c \times 6$, then what is the sum of a and c ?

- A) 22 B) 24 C) 26 D) 28

Q32: The sum of ages of Asif and Tehseen is 44. What is the age of Asif if Tehseen is 12 years elder than Asif?

- A) 16 B) 24 C) 28 D) 36

Q33: What is ratio of the number of prime factors and all positive factors of 24?

- A) $\frac{1}{4}$ B) $\frac{1}{5}$ C) $\frac{2}{7}$ D) $\frac{2}{3}$


Q34: What is x if $2x - 8 = x + 11$?

- A) 15 B) 12 C) 11 D) 19

Q35: What is the remainder when 111 is divided by 11?

- A) 11 B) 10 C) 1 D) 0

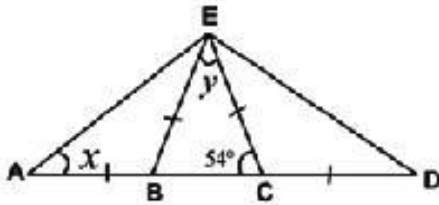
Q36: A girl has 4 paper strips of the same length. She glues 2 of them together with a 10 cm overlap, and gets a strip of 50 cm long.



With the other two paper strips, she wants to make a strip of 56 cm long. How long should the overlap be?

- A) 3 B) 4 C) 6 D) 8

Q37: In the figure below, the sides \overline{AB} , \overline{BE} , \overline{EC} and \overline{CD} are congruent. What is the sum of x and y ?



- A) 100° B) 99° C) 87° D) 83°

Q38: The following numbers are arranged according to a rule.

2, 10, 26, 30, 58, 122

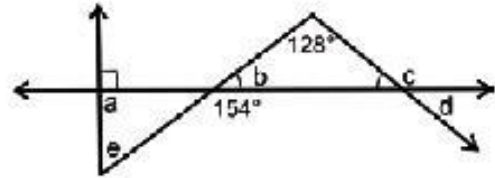
Which of the following numbers should not be in the number pattern above?

- A) 10 B) 20 C) 50 D) 30

Q39: Mr. Sohail is a retired teacher, will get a 10% increase in his monthly pension from July 2017. He spends 50% of his pension on food items. How much money will he be spending on food items during the next month, if he currently spends Rs.36000?

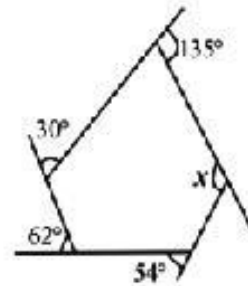
- A) Rs. 36000 B) Rs. 37200
C) Rs. 38000 D) Rs. 39600

Q40: According to figure below, which of the following is correct?



- A) $a+b+e=180^\circ$ B) $c=128^\circ + d$
C) $b=46^\circ$ D) $c+b=180^\circ$

Q41: Four exterior angles of the pentagon are given in the figure below.



What is the measure of angle x ?

- A) 101° B) 107° C) 111° D) 113°

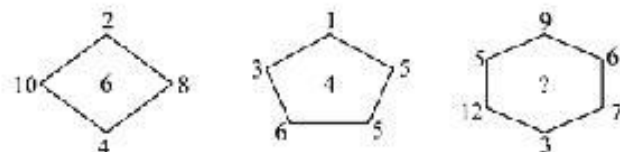
Q42: Ali, Hassan, Raees and Zaid have $\frac{9}{10}$ kg, $\frac{4}{5}$ kg, $\frac{2}{5}$ kg and $\frac{7}{5}$ kg nuts respectively. How much kg will each have if they mix all the nuts and share them equally?

- A) $\frac{29}{40}$ B) $\frac{35}{10}$ C) 29 D) $\frac{35}{40}$

Q43: Haroon solved the expression $\frac{3}{4} + \frac{2}{5}$ in four different ways. Which way is the correct one?

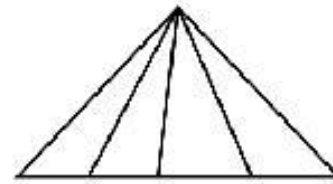
- A) $\frac{3}{4} + \frac{2}{5} = \frac{3+2}{4+5} = \frac{5}{9}$
 B) $\frac{3}{4} + \frac{2}{5} = \frac{5 \times 3 + 4 \times 2}{4 \times 5} = \frac{5 \times 7 \times 2}{4 \times 5} = \frac{70}{20} = \frac{7}{2}$
 C) $\frac{3}{4} + \frac{2}{5} = \frac{5 \times 3 + 4 \times 2}{4 \times 5} = \frac{15 + 8}{4 \times 5} = \frac{23}{20}$
 D) $\frac{3}{4} + \frac{2}{5} = \frac{3+2}{4 \times 5} = \frac{5}{20} = \frac{1}{4}$

Q44: What is the unknown number indicated by question mark in the figure given below?



- A) 7 B) 6 C) 5 D) 4

Q45: How many triangles are there in given figure?



- A) 4 B) 5 C) 10 D) 12

Q46: The average of 30 numbers is 54. The number 39 was incorrectly read as 93 while calculating. What is the correct average?

- A) 61.2 B) 61.3 C) 52.2 D) 62.2

Q47: What is the unknown number indicated by question mark in the figure given below?

22	8	6	9	⇒	11
18	12	4	2	⇒	8
15	5	10	6	⇒	?

- A) 12 B) 10 C) 14 D) 16

Q48: What is the unknown number indicated by question mark in the figure given below?

6.27	3.73	2	→ 5
1.43	4.57	3	→ 2
2.82	1.18	4	→ ?

- A) 1 B) 2 C) 3 D) 4

Q49: The sides of a rectangle are 16 m and 24 m respectively. A person wants to divide it into squares so that each square is as big as possible. What is the number of squares?

- A) 6 B) 8 C) 12 D) 15

Q50: If sum of the measures of two angles of a triangle is 55° , then the third angle is:

- A) Reflex Angle B) Obtuse Angle
C) Right Angle D) Acute Angle

Bright Future is waiting for PakTurk students



Marla Batool Zaidi

1st POSITION
In HSSC - II, 2016
Sukkur Board



Sumbul Jabbar

1st POSITION
In Pre-Engineering (Girls)
In HSSC - II, 2017
Sukkur Board



Zehra Batool

1st POSITION
In HSSC - II, 2017
Pre-Medical (Overall)
Sukkur Board



Usman Khalid

2nd POSITION
In HSSC - II, 2016
Lahore Board



M. Nouman Tariq

3rd POSITION
In HSSC - II, 2017
Federal Board



Sadaf Muir

3rd POSITION
In SSC - II, 2017
Baluchistan Board



Touseef-Ur-Rehman

3rd POSITION
In HSSC - II, 2016
Lahore Board



Sannia Nazir

Top In World
In IGCSE Level Accounting
Top In Pakistan
In IGCSE Level Economics



Arnuqhan Aslam

TOP
In North Pakistan
In Cambridge
International AS Level
Maths Language



Areeba Haider

TOP
In Punjab
In English as a
Second Language
In Cambridge IGCSE



Soban Mahmood

**2nd Place in Best Across Five
Cambridge International
AS Levels**

PAKISTAN'S FIRST "OXFORD QUALITY SCHOOLS"



PESHAWAR



LAHORE



ISLAMABAD



HYDERABAD



JAMSHORO



KARACHI



ISLAMABAD



LAHORE



QUETTA